

Money SATS style questions

Look at these four fruits.



20p



40p



50p



30p

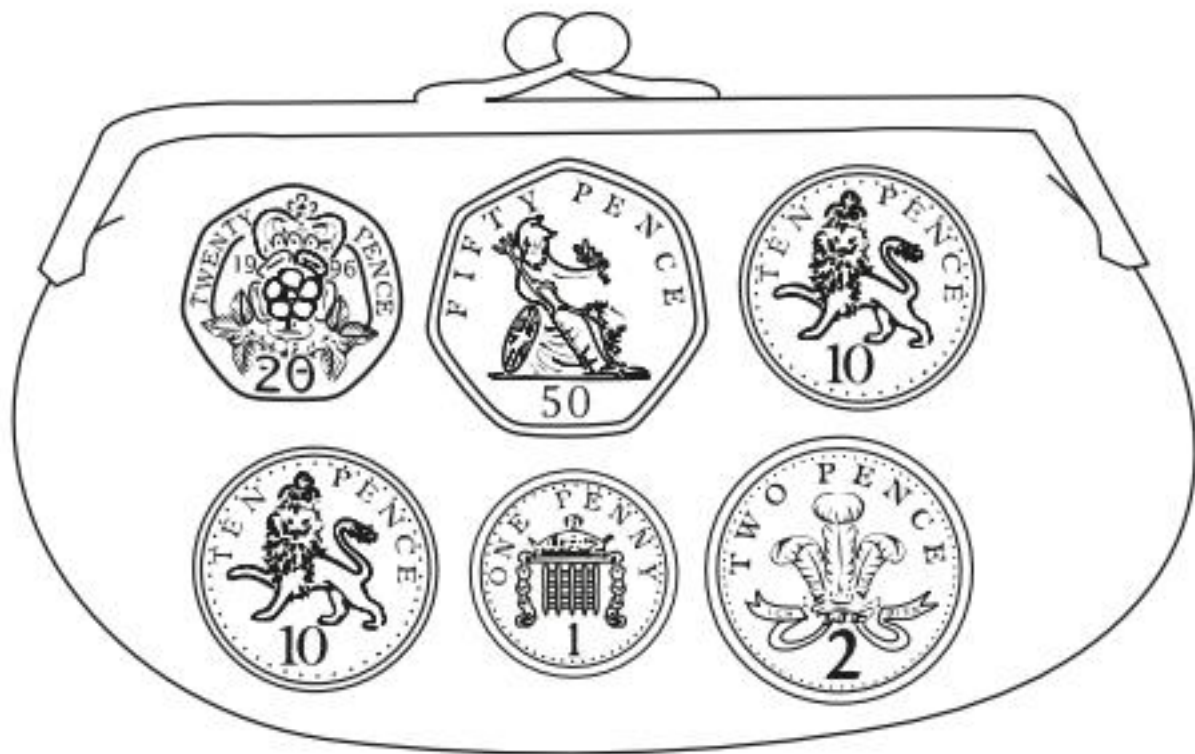
Kemi buys **three different** fruits.

She spends exactly **£1**

Tick the **three** fruits that she buys.

15

Sita has these coins in her purse.



How much money does she have?

p

Less than



More than



Match each coin to the correct box.

One has been done for you.

Look at these coins:



What is the largest amount you can make using **three** of these coins?

p

A game costs £25

Ben has £19



How much **more** money does Ben need to buy the game?

£

Ajay has four friends: Ben, Kemi, Sam and Sita.

He gives ten pence to each friend.

How much money does he give altogether?

Write your answer in the box.



35p


Amy buys **one** pear for 35p.

She pays with a 50p coin.



How much change does Amy get?

 p



biscuits
20p each



cakes
25p each

Sam buys **3** biscuits and **1** cake.

How much does Sam spend **altogether**?

Show
your
working

Sam has 55p.

Ben has 10p less than Sam.

Tick the coins that **Ben** has.



Ajay has **20p** in 2p coins.

How many 2p coins does Ajay have?



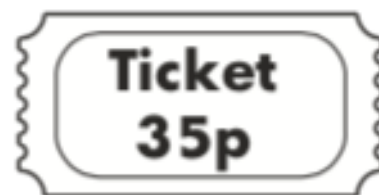
coins

32 Ben has **90p**.

He buys **2** tickets.

Each ticket costs **35p**.

How much money does Ben have **left**?



Show
your
working



Write five coins that have a total of 37p.

Amy has 50p.

She buys a pencil for **30p**.

Tick the purse that shows how much money Amy has **left**.

